

Adding with objects

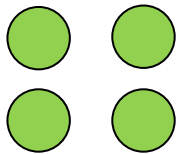

Addition Worksheet

Count / draw circles, read / write numbers and find the sums.


 $+$

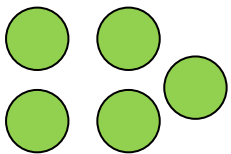

 $=$

$\underline{\quad} + \underline{\quad} = \underline{\quad}$


 $+$


$\underline{\quad} + \underline{\quad} = \underline{\quad}$

$4 + 2 = \underline{\quad}$


 $+$


$\underline{\quad} + \underline{\quad} = \underline{\quad}$

$3 + 5 = \underline{\quad}$

$1 + 6 = \underline{\quad}$