













Addition equations

Addition Worksheet

Count the circles. Write the numbers and find the sum.

| | | | | | | | |
|---|---|---|-------|---|-------|---|-------|
|  | + |  | _____ | + | _____ | = | _____ |
|  | + |  | _____ | + | _____ | = | _____ |
|  | + |  | _____ | + | _____ | = | _____ |
|  | + |  | _____ | + | _____ | = | _____ |
|  | + |  | _____ | + | _____ | = | _____ |
|  | + |  | _____ | + | _____ | = | _____ |