














Adding objects up to 10

Addition Worksheet






Write the answer.



$$\begin{array}{r} 1. \quad 2 \text{        $$




$$\begin{array}{r} 2. \quad 4 \text{     $$




$$\begin{array}{r} 3. \quad 5 \text{     $$

$$\begin{array}{r} 4. \quad 3 \text{     $$

$$\begin{array}{r} 5. \quad 2 \text{     $$

$$\begin{array}{r} 6. \quad 1 \text{  $$

$$\begin{array}{r} 7. \quad 1 \text{   $$

$$\begin{array}{r} 8. \quad 2 \text{   $$