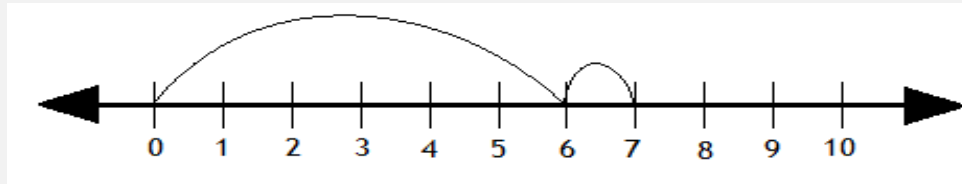


Adding with number lines

Addition Worksheet

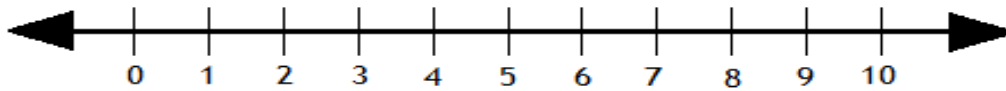
Solve the following by drawing hops on the number line.

Example:



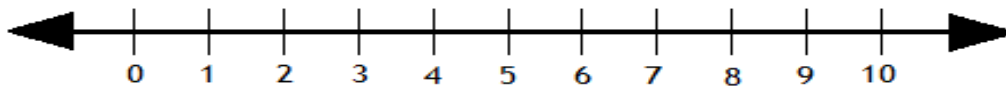
$$6 + 1 = \boxed{7}$$

1.



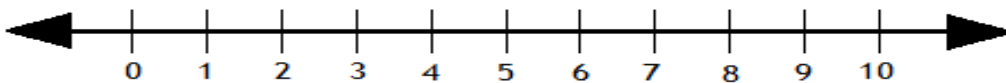
$$5 + 2 = \boxed{}$$

2.



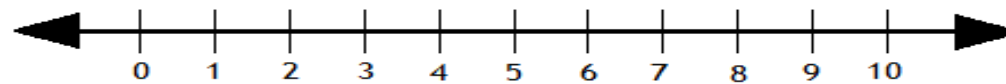
$$4 + 4 = \boxed{}$$

3.



$$3 + 1 = \boxed{}$$

4.



$$6 + 4 = \boxed{}$$