




Add & subtract by 1's and 2's

Addition and Subtraction Worksheet


Count the circles. Write the numbers. Find the sum or difference.




$$\underline{\quad} + \underline{\quad} = \underline{\quad}$$




$$\underline{\quad} - \underline{\quad} = \underline{\quad}$$



$$\underline{\quad} + \underline{\quad} = \underline{\quad}$$



$$\underline{\quad} - \underline{\quad} = \underline{\quad}$$



$$\underline{\quad} + \underline{\quad} = \underline{\quad}$$