


Subtracting objects


Subtraction Worksheet

Circle the objects being taken away. How many are left?


1.
$$\begin{array}{r} 8 \\ - 4 \\ \hline 4 \end{array}$$
 

2.
$$\begin{array}{r} 4 \\ - 3 \\ \hline \end{array}$$
 

3.
$$\begin{array}{r} 7 \\ - 5 \\ \hline \end{array}$$
 

4.
$$\begin{array}{r} 5 \\ - 1 \\ \hline \end{array}$$
 

5.
$$\begin{array}{r} 4 \\ - 1 \\ \hline \end{array}$$
 

6.
$$\begin{array}{r} 6 \\ - 6 \\ \hline \end{array}$$
 

7.
$$\begin{array}{r} 8 \\ - 5 \\ \hline \end{array}$$
 

8.
$$\begin{array}{r} 2 \\ - 0 \\ \hline \end{array}$$
 