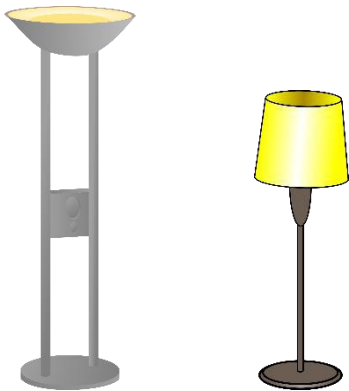


Taller / Shorter

Measurement Worksheet

Look at the pictures in the boxes. Answer the question by circling the correct picture.


Which is taller?




Which is shorter?



Which is shorter?



Which is taller?



Which is taller?



Which is shorter?

