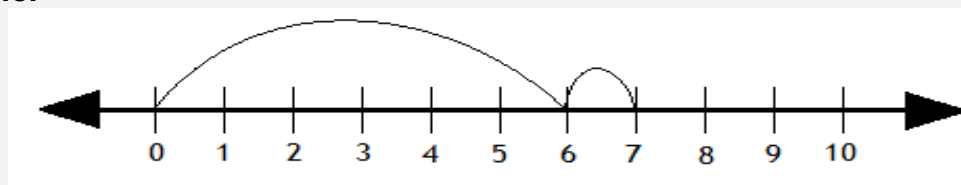


## Adding with number lines

### Addition Worksheet

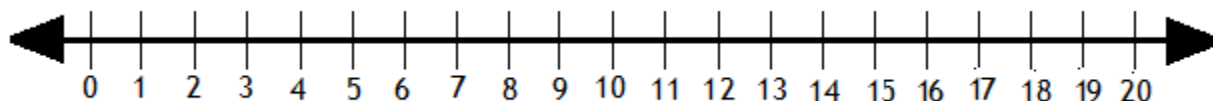
Solve the following by drawing hops on the number line.

**Example:**



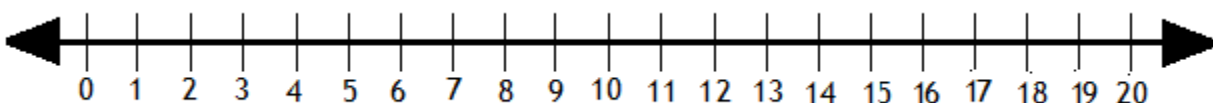
$$6 + 1 = \boxed{7}$$

1.



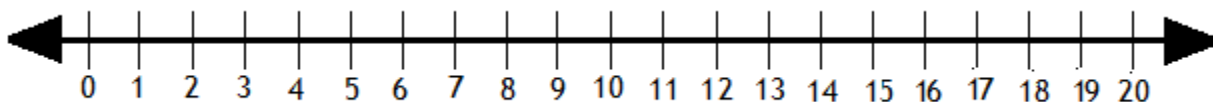
$$5 + 12 = \boxed{\phantom{00}}$$

2.



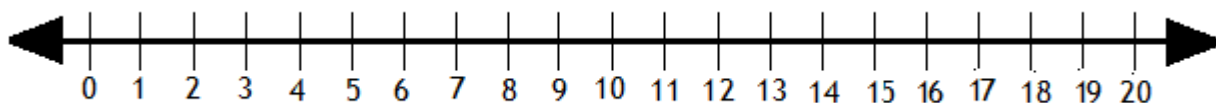
$$10 + 4 = \boxed{\phantom{00}}$$

3.



$$3 + 8 = \boxed{\phantom{00}}$$

4.



$$7 + 10 = \boxed{\phantom{00}}$$