





Add & subtract by 1's and 2's

Addition and Subtraction Worksheet

Count the circles. Write the numbers. Find the sum or difference.


 $+$

 $=$

 _____ + _____ = _____


 $-$

 $=$

 _____ - _____ = _____


 $+$



 $=$

 _____ + _____ = _____


 $-$

 $=$

 _____ - _____ = _____


 $+$

 $=$

 _____ + _____ = _____