

Reading Bar Charts

Graphing Worksheet

Read the bar graph and answer the questions.


Shapes




How many of each shape ?.....




Squares ____?



Triangles ____?



Circles ____?



Stars ____?