


# Longer / Shorter

## Measurement Worksheet

Look at the pictures in the boxes. Answer the question by circling the correct picture.


Which is longer?



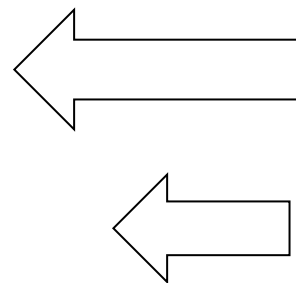
Which is shorter?




Which is shorter?



Which is longer?



Which is longer?



Which is shorter?

