

Making 10 with objects


Addition Worksheet

Draw more circles so you have 10 circles. Write the numbers.




+

$$\underline{1} + \underline{\quad} = \underline{10}$$




+

$$\underline{6} + \underline{\quad} = \underline{10}$$




+

$$\underline{3} + \underline{\quad} = \underline{10}$$




+

$$\underline{4} + \underline{\quad} = \underline{10}$$



+

$$\underline{9} + \underline{\quad} = \underline{10}$$



+

$$\underline{2} + \underline{\quad} = \underline{10}$$