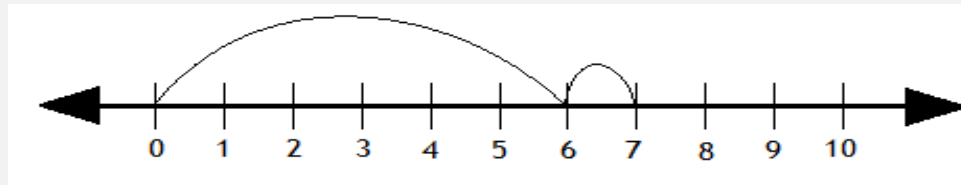


Adding with number lines

Addition Worksheet

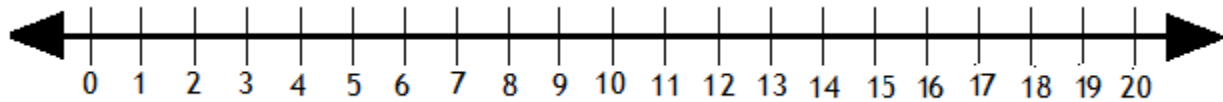
Solve the following by drawing hops on the number line.

Example:



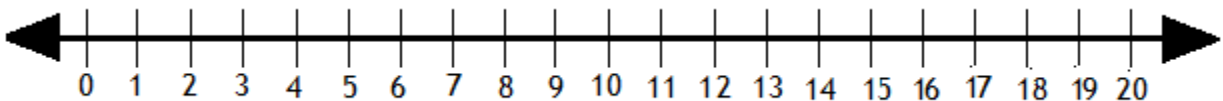
$$6 + 1 = \boxed{7}$$

1.



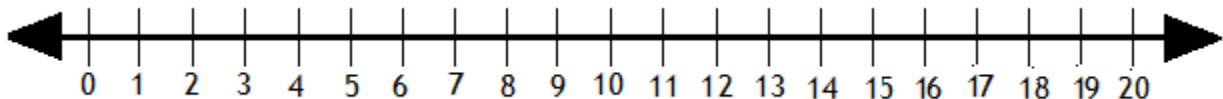
$$11 + 6 = \boxed{}$$

2.



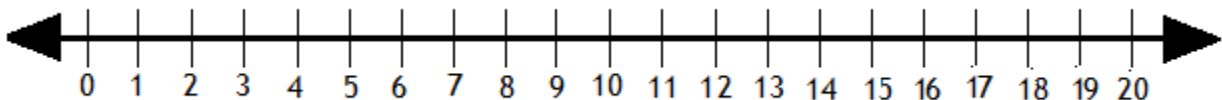
$$2 + 17 = \boxed{}$$

3.



$$6 + 5 = \boxed{}$$

4.



$$7 + 10 = \boxed{}$$